



Rewarding Learning

General Certificate of Secondary Education
2022

Centre Number

--	--	--	--	--

Candidate Number

--	--	--	--	--

Home Economics: Child Development

Unit 1

Parenthood, Pregnancy and
the Newborn Baby

MV18

[GCD11]

MONDAY 6 JUNE, MORNING

Time

1 hour 15 minutes, plus your additional time allowance.

Instructions to Candidates

Write your Centre Number and Candidate Number in the spaces provided at the top of this page.

You must answer the questions in the spaces provided.

Do not write on blank pages.

Complete in black ink only.

Answer **all eight** questions.

Information for Candidates

The total mark for this paper is **75**.

Figures in brackets printed at the end of each question indicate the marks awarded to each question or part question.

Quality of written communication will be assessed in Questions **7** and **8**.

1 Read the following statements and tick the box beside each correct answer.

Tick [✓] only **one** box for each statement.

(a) The soft spot on a newborn baby's head is called the:
[1 mark]

A fontanelle

B lanugo

C vernix

D hormone

(b) Conception happens in the: [1 mark]

A uterus

B ovary

C cervix

D fallopian tube

(c) A doctor who specialises in the female reproductive system is called a: [1 mark]

A paediatrician

B midwife

C gynaecologist

D GP

(d) The average length of a newborn baby is: [1 mark]

A 50 cm

B 45 cm

C 55 cm

D 35 cm

(e) How many weeks after birth is the postnatal check on the mother? [1 mark]

A 4

B 6

C 8

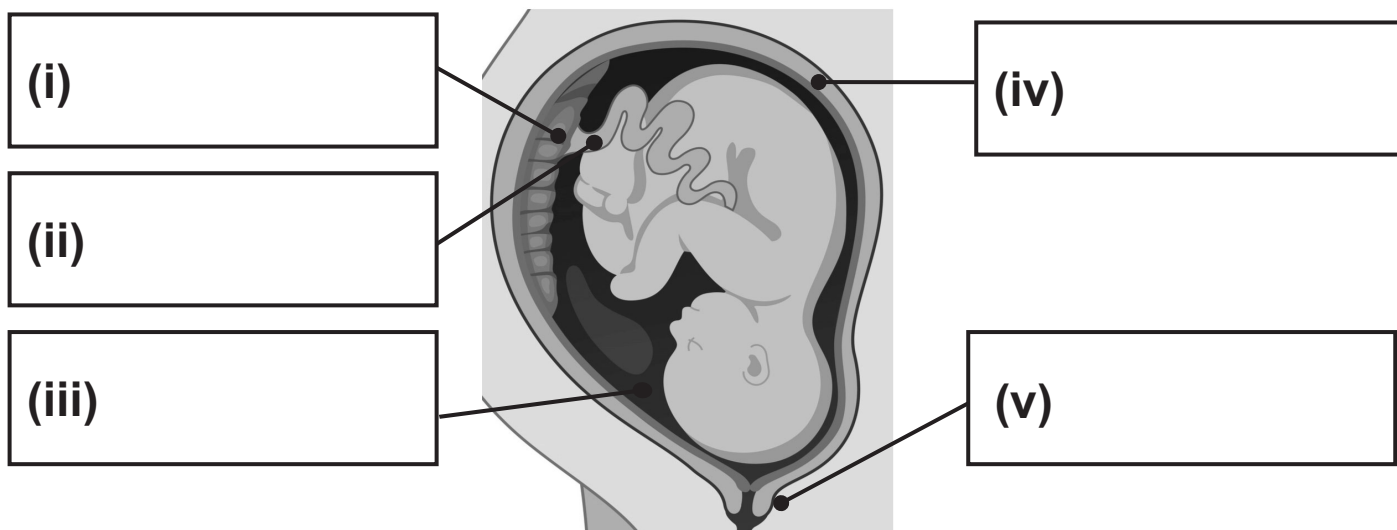
D 10

2 (a) Write down **three** possible causes of infertility.

[1 mark for each]

1. _____
2. _____
3. _____

(b) Label the diagram of the fetus at 40 weeks. [5 marks]



(c) Describe the role of a paediatrician. [2 marks]

3 (a) Explain **two** responsibilities parents and carers have in meeting the rights of a child according to the UN Convention on the Rights of the Child.

[2 marks for each]

1. _____

2. _____

(b) Explain **one** reason why an ultrasound scan is carried out. [2 marks]



(c) Describe the following:

(i) An ectopic pregnancy [3 marks]

(ii) A breech birth [3 marks]

4 Patrick and Ellie are expecting their first child.

(a) Discuss **three** points Patrick and Ellie should consider when choosing a cot. [2 marks for each]



1. _____


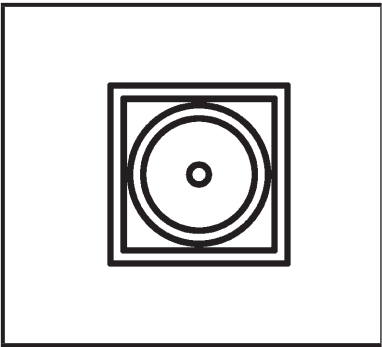
2. _____

3. _____

(b) Discuss how the Consumer Rights Act 2015 will protect Patrick and Ellie when buying the cot. [2 marks]

(c) The care labels below may be found on babies' clothes.

Write down what each label means. [2 marks]

Label	Meaning
(i) 	
(ii) 	

(d) Suggest **two** pieces of advice Ellie should follow to help prevent the following minor problems in pregnancy.

(i) Constipation [2 marks]

- _____
- _____

(ii) Varicose veins [2 marks]

- _____
- _____

5 (a) List **two** possible sterilisation methods used when bottle feeding. [1 mark for each]

1. _____

2. _____

(b) Explain **two** rules to follow when preparing a formula feed for a newborn baby. [2 marks for each]

1. _____

2. _____

(c) Analyse how alcohol consumption can affect the unborn baby. [4 marks]

SOURCES:

Q2(b) . . . Source: © Getty Images

Q3(b) . . . Source: © Getty Images

Q4(a) . . . Source: © Getty Images

For Examiner's use only	
Question Number	Marks
1	
2	
3	
4	
5	
6	
7	
8	
Total Marks	

Examiner Number

Permission to reproduce all copyright material has been applied for. In some cases, efforts to contact copyright holders may have been unsuccessful and CCEA will be happy to rectify any omissions of acknowledgement in future if notified.